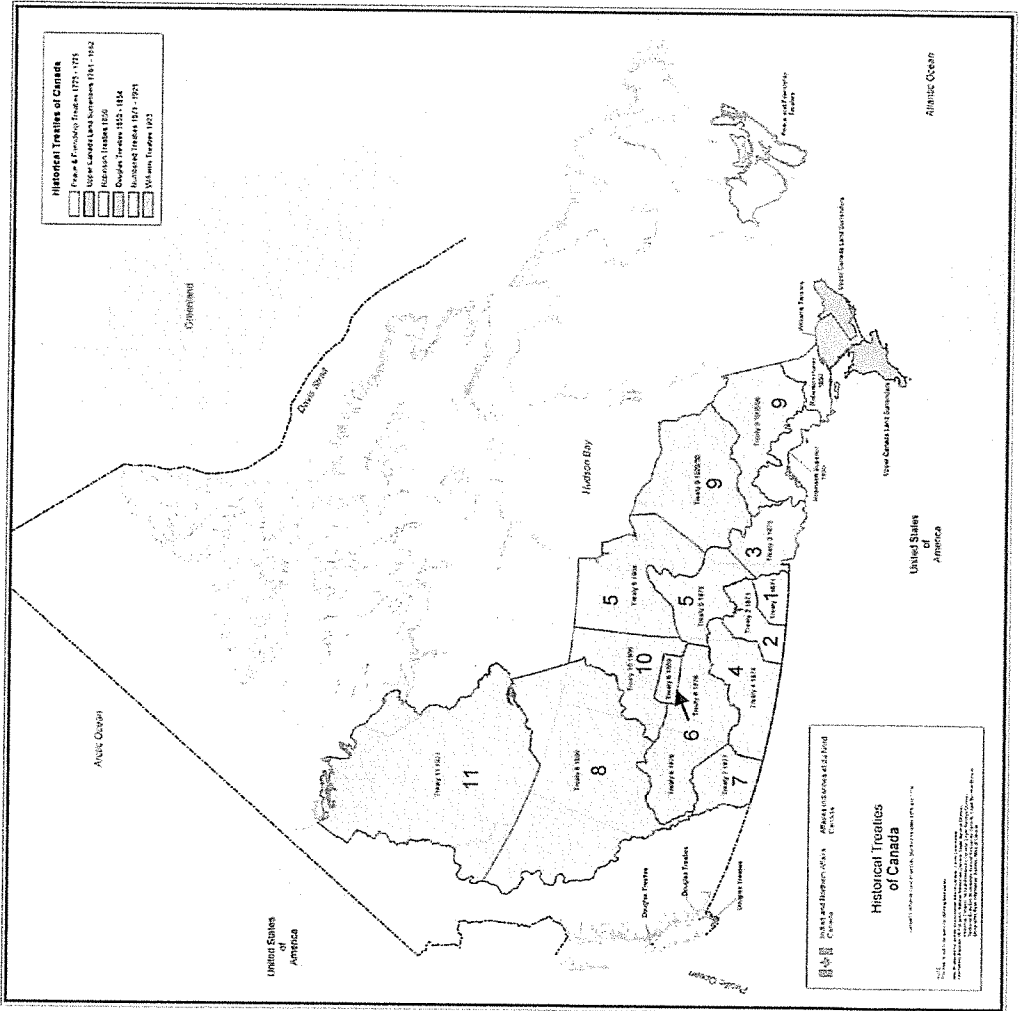


Historical Treaty Map

BLM
1.1.1.1

Examine and discuss the historical treaty map, which indicates territories in Canada acquired from First Nations through treaties. Generate a list of the possible impacts of the loss of traditional territories, and record the list in your learning log. **Note:** For a larger, full-colour version of this map, see <http://manitobawildlands.org/maps/HistTreatyMapCan_lg.jpg>.




- Treaty 1: 1871
- Treaty 2: 1871
- Treaty 3: 1873
- Treaty 4: 1874
- Treaty 5: 1875, 1908
- Treaty 6: 1876
- Treaty 7: 1877
- Treaty 8: 1899
- Treaty 9: 1905, 1929-1930
- Treaty 10: 1906
- Treaty 11: 1921

Historical Treaty Map: Copyright ©
Natural Resources Canada.
Reproduced under the terms for Non-commercial Reproduction, as described at <www.nr.can-nrcan.gc.ca/com/notavis-eng.php>.


First Nations Lands

1. What did First Nations revolve most of their lives around spiritually and to get what they needed (food, shelter, tools, clothing, etc...)?
2. After contact, how do you think the First Nations relationship with the land changed?
3. View map http://manitobawildlands.org/maps/HistTreatyMapCan_lg.jpg after viewing the map does it appear that there is a lot of land for First Nation use? How do the large areas of land signed by treaties actually compare to the size of most reserves?
4. How do you think the loss of land affected First Nations? Explain.



The Royal Proclamation of 1763

Use www.thecanadianencyclopedia.ca website as a source to answer the following questions

1. What led to the Royal Proclamation of 1763?
 2. Who made the Proclamation? What assurances did it give to First Nations?
 3. What was the role of Pontiac's War towards the creation of the document?
 4. The Royal Proclamation established a constitutional basis for what? (We are in Territory #1)
 5. What did the Canadian Government recognize in 1870?
 6. What does the Supreme Court's 1973 Ruling state about Aboriginal Land Rights?
- 
- 